

# JAI HIND COLLEGE

Basantsing Institute of Science & J. T. Lalvani College of Commerce. and Sheila Gopal Raheja  
College of Management.

*Empowered Autonomous*

## **Common Entrance Exam (JHC-CEE) for admission to FY Degree (UG) Self Financing Programs for 2025-2026**

I. Admission to the following degree programs under the Self Financing scheme will be based on the Online Common Entrance Exam (CEE) and Std XII Board Exam Marks.

<b>Sr. No</b>	<b>Name of the Degree Program</b>	<b>Brief Nomenclature</b>
1.	Bachelor in Digital Strategy	BDS
2	Bachelor of Accounting and Finance	BAF
3.	Bachelor of Banking & Insurance	BBI
4.	Bachelor of Financial Market	BFM
5.	Bachelor of Mass Media	BMM
6.	Bachelor in Actuarial Science & Quantitative Finance	BAQF

## II. Instructions to apply for JHC - CEE:

Applicants are required to read the following step by step instructions guide in order to apply for JHC - CEE:

1. Go to the below link and register yourself to fill the online form to apply for JHC Common Entrance Exam (CEE):

<https://www.radicalforms.com/registration?ins=OA==> (**link will be activated on 15th March,2025**)

2. Fill the form in its entirety and click on 'Next' to proceed towards online payment of test fee.

Note: Please keep the following documents handy as they would be required to be uploaded while you fill the form:

- Aadhaar Card

- Recent Photo

3. Proceed towards online payment of entrance test fee of Rs. 1200/- .This fee is non-refundable and non-transferable under any circumstances.

4. Upon successful payment of the entrance exam fee, a unique application number shall be displayed and an acknowledgement shall be sent to the registered email id and mobile number.

5. This application number will be your point of reference / identification and shall be needed to be entered when you take the online entrance exam.

6. You can login anytime to view your submitted entrance exam form and can reach out to us on the below admission coordinates in case of any queries:  
Exam / admission related queries:

For BBI, BAF, BFM, BMM, Bachelor in Digital Strategy (BDS), BAQF :-  
[admissions.commerce.mgmt@jaihindcollege.edu.in](mailto:admissions.commerce.mgmt@jaihindcollege.edu.in)

For Tech support: [support@radicalforms.com](mailto:support@radicalforms.com)

7. No request for change of date/session for Examination shall be entertained.
8. Competent Authority also reserves the right to allot the candidate to any slot
9. Candidate will appear for the examination at his/her own risks and expenses

### **III Marking Scheme**

The Online Entrance Exam will consist of Multiple Choice based Questions (MCQ) as per the detailed structure specified hereunder.

#### **Structure of Online Common Entrance Exam (CEE)**

<b>Subject Matter</b>	<b>Weightage</b>	<b>Number of Question</b>	<b>Total Marks</b>	<b>Total Duration</b>
English	25%	25	100	90 minutes
Logic, Reasoning & Data Interpretation	25%	25		
Maths (up to StdX <sup>th</sup> Maharashtra State Board)	25%	25		

Current Affairs	25%	25		
-----------------	-----	----	--	--

**There is no negative marking System for this test.**

**Test Duration: 90 minutes**

**Medium of CET: English**

**Mode of Examination - Online**

**Kindly Note ; Prior to entrance exam a mock test will be conducted for the students to get familiar with the system. The mock test will be conducted between 20th to 25th of May 2025 from 10am to 5pm. Details of Mock test will be sent on the students email id and will also be available on [www.jaihindcollege.com](http://www.jaihindcollege.com) *PLEASE NOTE – MOCK TEST MANDATORY FOR ALL STUDENTS.***

**IV Rules to be followed – before and during the conduct of examination.**

- a. The candidate will take the entrance exam from a separate place/room where there is no other person in vicinity during the entire duration of the exam.
- b. The place should be noise-free with no movement of people in the surroundings.
- c. All items except simple calculators (non-programmable/ nonscientific) should be removed from the desk. Students are allowed to use battery operated portable calculators. The calculators can be of any type with up to 6 functions, 12 digits and up to two memories. Scientific and programmable calculators are not allowed.
- d. Candidates must not talk to anyone during the entrance exam period or talk/read to themselves loudly.
- e. Candidates must not use head phones, earbuds, or any other type of listening equipment except the speaker of the laptop.

f. All the computer settings need to be done much before the entrance exam time and to be tested properly. For any failure of the computer system, during the entrance exam period, JaiHind College will not be responsible and the candidate will lose his/her attempt ;no reexamination will be conducted.

g. Candidates must not switch off the webcam or mic or cover the webcam during the entrance exam. Changing of the camera angles to obstruct views can lead to stopping of the test by the online invigilator or AI enabled system. Candidates must face the computer screen and must not look away from the laptop/desktop.

h. Candidates must not communicate with any other person by any means. Candidates must not seek any assistance or refer to study material/mobile/ for answering the questions.

i. During the online examination the IP address of the candidate will be tracked to monitor individual participation. This measure is in place to prevent multiple individuals from sitting together and taking the exam simultaneously. It is imperative that each candidate accesses the examination independently, from their own designated location. Candidates adhere strictly to this guideline to avoid any potential issues during the examination.

#### **V. Action against candidates found guilty of misconduct/ use of unfair means**

Candidates are advised in their own interest that they should not furnish any particulars that are false, tampered with or fabricated and should not suppress any material information while submitting online application. At the time of examination or in a subsequent admission procedure, if a candidate is(or has been) found guilty of –

- (i) Using unfair means or
- (ii) Impersonating or procuring impersonation by any person or
- (iii) disclosing, publishing, reproducing, transmitting, storing or facilitating transmission and storage of contents of the test (s) or any information therein in whole or part thereof in any form or by any means, verbal or written, electronically or mechanically for any purpose

or resorting to any irregular or improper means in connection with his/ her candidature or  
(iv) Obtaining support for his/ her candidature by unfair means, or

(v) Carrying mobile phones or similar electronic devices of communication in the examination hall, such a candidate may, in addition to rendering himself/ herself is liable to criminal prosecution, be liable to be disqualified from the examination for which he/ she is a candidate

## **VI. General Instructions**

1. The possibility of occurrence of some problem in the administration of the examination can not be ruled out completely which may impact test delivery and/or result from being generated. In that event, every effort will be made to rectify such problems, which may include movement of candidates, delay in tests. Conduct of a re-exam is at the absolute discretion of the test conducting body i.e. Jai Hind College. Candidates will not have any claim for a re-test. Candidates not willing to move or not willing to participate in the delayed process of test delivery shall be summarily rejected from the process.

2. Decision of Jai Hind College in all matters relating to conduct of Jai Hind College Entrance exam will be final and binding on the candidate. No correspondence or personal enquiries shall be entertained by the College on this behalf.

3. Instances for providing incorrect information and/or process violation by a candidate detected at any stage of the admission process will lead to disqualification of the candidate from the entire admission process.

4. Candidates will take the entrance exam under virtual/online invigilation mode. This is also called the Remote Proctored Exam.

5. Candidates must Login 30 minutes before the entrance exam start time to ensure a smooth process.

6. The exam will be conducted on a **single day** between **26th May 2025 and 31st May 2025**. The exact date will be announced shortly, and slots will be assigned to respective students based on their application number.
7. Candidate has to use his/her user id and Password sent on his/her email for logging into the entrance examination system. Candidates have to click on the link sent on the candidates registered email id.
8. Once he/she logs into the system he/she will be shown the exam available for him/her. The exam will be available only during the defined time slot.
9. Candidate needs to sit for the exam in a position so that his/her face is clearly visible in the camera of the laptop / PC. Place should have proper lighting and no one else should enter the same place in the entire duration of the exam.
10. No WASHROOM or other breaks will be allowed during the entire duration of the exam. Candidates are advised to keep water with them if they want.
11. During the entire duration of the exam, the candidate's activities will be monitored and recorded.
12. If the candidate indulges in unfair practices/suspicious acts like talking to someone else, trying to share screen, leaving their place etc. the AI Enabled system or online invigilator will intervene and cancel/stop the entrance test immediately.
13. No reexamination will be conducted under any circumstances. The decision of Jai Hind college will be final and binding on the student.

**Further details of the Common Entrance Exam will be announced on the Jai Hind College website.**

**VI Syllabus for Online Entrance Exam 2025-26**

The entrance examination will primarily check basic aptitude in English, Logical & Visual Reasoning, Data interpretation, Maths & Current affairs. Entrance test will consist of multiple choice questions from the following four sections.

<b>English</b>
<ul style="list-style-type: none"><li>● Grammar and Composition (Usage of prepositions/article/conjunctions, Sentence construction/correction, Tenses)</li><li>● Vocabulary</li><li>● Communication Etiquette</li><li>● Reading Comprehension</li></ul>

<b>Logic, Reasoning &amp; Data Interpretation</b>
<b>Data Interpretation</b> <ul style="list-style-type: none"><li>● Pie Chart</li><li>● Bar graph/ histogram</li><li>● Tables</li><li>● Line chart/ Line Graph</li><li>● Venn Diagram</li></ul>
<b>Logical Reasoning</b> <ul style="list-style-type: none"><li>● Blood Relations</li><li>● Number Series/ Alphabet series</li><li>● Classification/ Analogy</li><li>● Coding/Decoding</li><li>● Direction Test</li></ul>



- Seating Arrangement
- Statement & Conclusion(arrangement)

### **Mathematics**

- Measures of central tendency (Mean, Median, Mode, Standard deviation)
- Time, Distance, Speed
- Profit & Loss
- Ratio & Proportion
- Sequence & Series
- Simple & Compound Interest
- Probability
- Fraction & Percentage
- Linear equations
- Sets, Relations and Functions
- Mensuration: Length, Volume, Surface, Area, Shape
- Graphs: lines and plane

### **Current Affairs**

- Civic Issues
- Indian and International Politics
- Business & Economics
- Sports

- Science & Technology
- General Knowledge

## VII SAMPLE QUESTIONS

### ENGLISH

1. The ambulance drove \_\_\_\_\_ to take the injured person to the hospital.
  - a. loudly
  - b. fast
  - c. bad
  - d. quietly
2. This dress will look better \_\_\_\_\_ you.
  - a. on
  - b. in
  - c. by
  - d. at
3. Choose the correct antonym for the word 'expand'
  - a. Increase
  - b. Enlarge
  - c. Contract
  - d. Grow
4. Choose the correct suffix to form a noun from the word 'Achieve'.
  - a. -ment

- b. -ful
- c. -less
- d. -ous

5. Which of the following words is spelled correctly?

- a. Accomodation
- b. Acquaintance
- c. Recieve
- d. Beleive

6. Electricity altered the way people thought about time because work and play were no longer dependent on the daily rhythms of sunrise and sunset, and the Internet \_\_\_\_\_.

- a. made communication slower and more expensive
- b. revolutionized the way we store and retrieve information
- c. limited access to global knowledge
- d. replaced the need for electricity

7. Select the correct sentence sequence forming a coherent paragraph:

- A. There is then a subjective reality – the ‘reality’ of political events as they are perceived by actors and citizens.
- B. Critical to the shaping of the second category of subjective perceptions, is constructed reality.
- C. We may speak of an objective political reality, comprising political events as they actually occur.

- a. C, A, B
- b. A, C, B
- c. B, A, C
- d. C, B, A

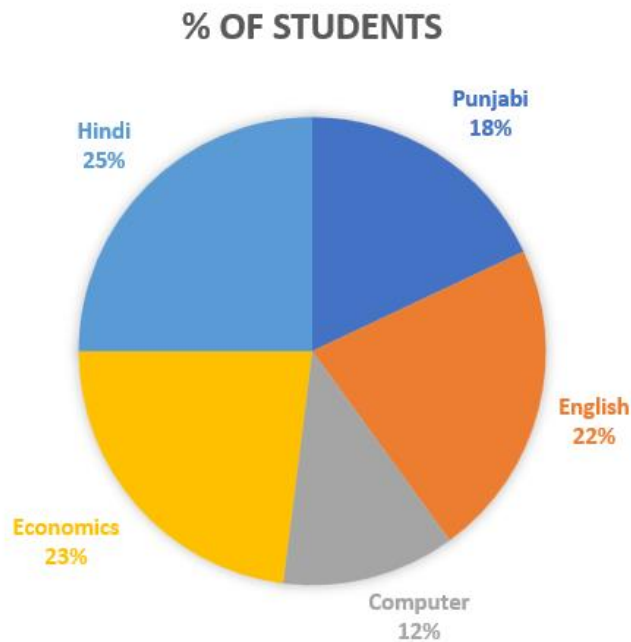
8. What does the idiom "Break the ice" mean?

- a. To break something made of ice
- b. To start a conversation in a social setting
- c. To feel cold in winter
- d. To end a relationship

9. If someone "Spills the beans," what are they doing?
- a. Dropping a bag of beans
  - b. Revealing a secret
  - c. Cooking food
  - d. Telling a joke
10. Today, cultures encourage maintaining a \_\_\_\_\_ and healthy environment to give advantages to \_\_\_\_\_ generations. Otherwise, it will not be possible for them to \_\_\_\_\_. A fresh and healthy environment is \_\_\_\_\_ for conducting business, creating wealth, and most significantly for human presence.
- a. big, all, progress, good
  - b. huge, all, endure, important
  - c. clean, many, demand, good
  - d. clean, future, endure, vital

**DATA INTERPRETATION**

Q1-Q3. The data of 500 students in a coaching institute for CET Exam is given below in the form of a pie chart. Use this data to answer the following questions.



Q1. The number of students of English is \_\_\_\_\_

- (a) 125
- (b) 150
- (c) 110
- (d) 100

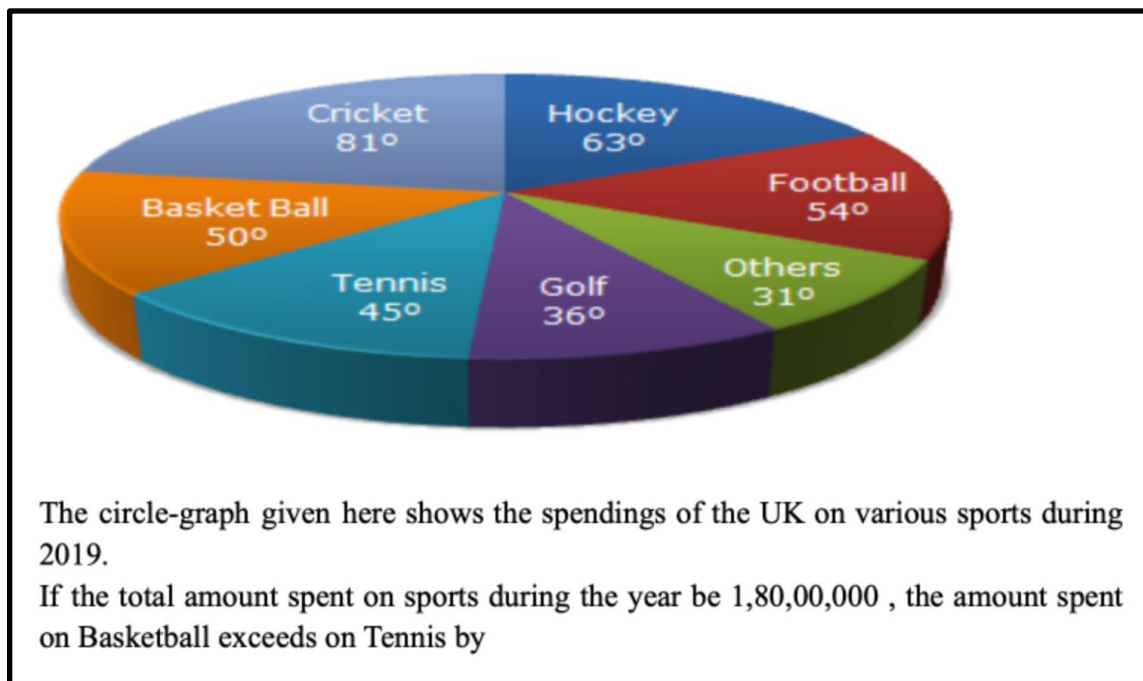
Q2. If it is found that there was some mistake in recording the data of students and  $\frac{2}{5}$ <sup>th</sup> of the students of Economics were of commerce, then which subject will have the lowest number of candidates?

- (a) Computer
- (b) Punjabi
- (c) Economics
- (d) Commerce

Q3. There is a condition that optional class will be organized if there are at least 50 students, then classes will be organized for

- (a) Punjabi, Economics, Hindi
- (b) English, Hindi, Economics
- (c) English, Hindi, Economics, Commerce
- (d) English, Hindi, Economics, Punjabi, Computer

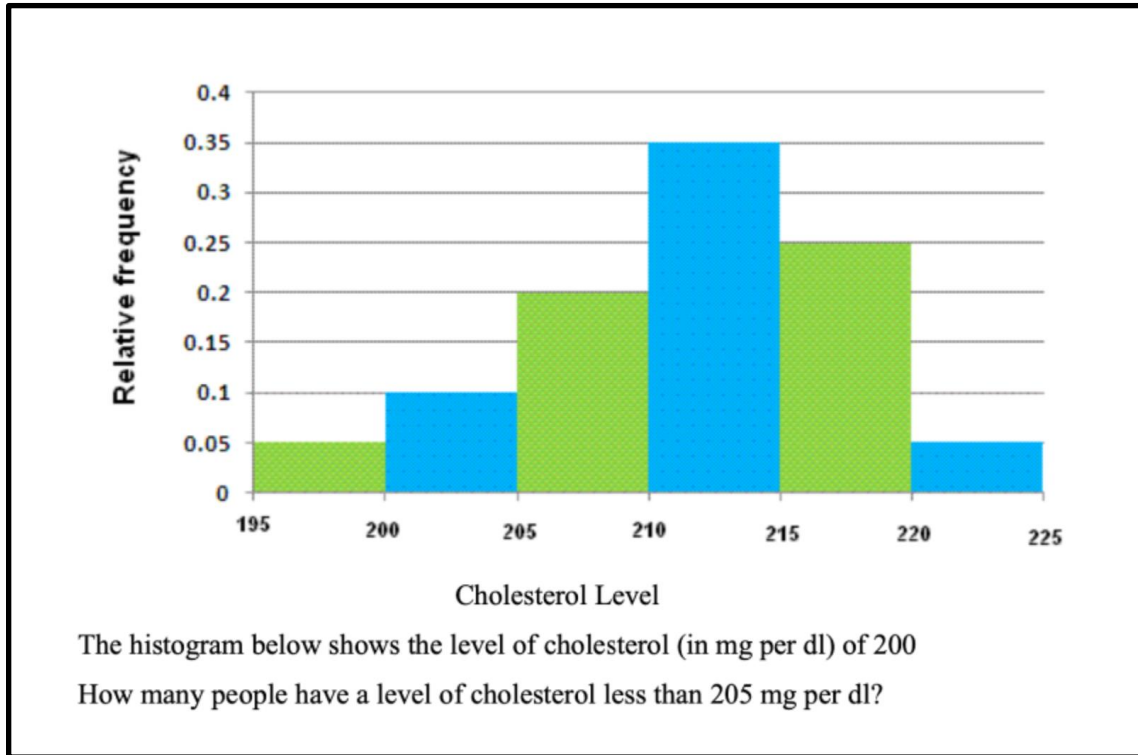
Q.4 Refer to the Pie- Chart to answer the underlying question.



- A. 4,10,000
- B. 3,60,000
- C. 2,50,000
- D. 3,75,000

Answer D. 2,50,000

Q.5 Refer to the Bar Chart to answer the underlying question.



- A. 25 people
- B. 27 people
- C. 33 people
- D. 30 people

Answer: D. 30 people

Q.6 Refer to the table and answer the following:





<b>Delay</b>	<b>No. of Arrivals</b>	<b>No. of Departures</b>
<b>0</b>	<b>1250</b>	<b>1400</b>
<b>0 - 30</b>	<b>114</b>	<b>82</b>
<b>30 - 60</b>	<b>31</b>	<b>5</b>
<b>&gt; 60</b>	<b>5</b>	<b>3</b>
<b>Total</b>	<b>1400</b>	<b>1490</b>

The table above contains the data of train arrival and train departure from a station. Study the table and find the number of trains that arrived late

- A. 9%
- B. 10.5%
- C. 10.71%
- D. 10%

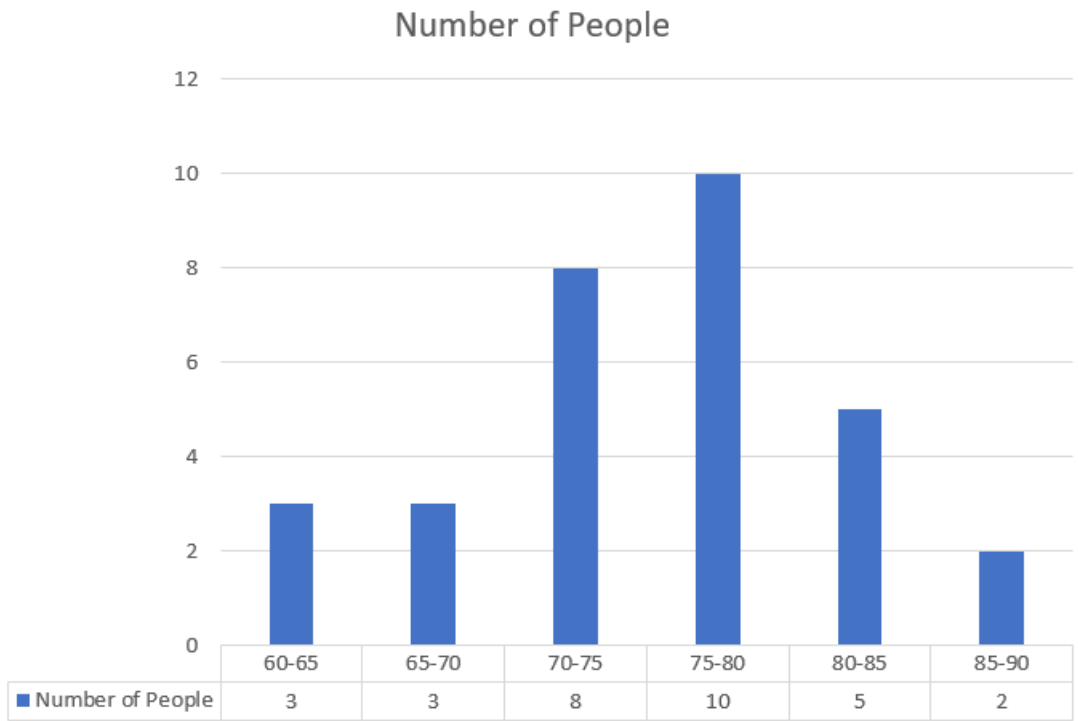
Answer: C. 10.71%

Q.7 Which of the following diagrams indicates the best relation between Professors, Doctors and Men ?

- A. 
- B. 
- C. 
- D. 

Answer: C

Q8. Study the given graph and solve the question:



Q8. Find the average height.

- (a) 75.24
- (b) 81.75
- (c) 73.24
- (d) 72.10

Q9-Q10. Read the following graph carefully and answer the questions given below:

Gender/State	Punjab	Kerala	HP	Rajasthan	Odisha
Female	35702	50246	21314	28573	25403
Male	32749	51432	28461	17456	31971

Q9. How many states have a higher proportion of female graduates than male graduates?

- (a) 0
- (b) 1
- (c) 2



(d) 3

Q10. Which state has the highest proportion of male graduates out of its total graduates?

- (a) HP
- (b) Kerala
- (c) Odisha
- (d) Punjab

### LOGICAL REASONING

Q.1. Which number will complete the following series 13, 21, 33, 49, \_\_\_\_\_

- A. 71
- B. 61
- C. 65
- D. 69

Answer: D. 69

Q.2 Select the number-pair in which the two numbers are related in the same way as are the two numbers of the following number- pair. 2 : 8

- A. 9 : 629
- B. 11 : 1321
- C. 7 : 343
- D. 8 : 502

Answer: C .7 : 343

Q.3 Complete the series SAD, TCF, UEH, \_\_\_\_\_, WIL

- A. VKH
- B. VHJ
- C. PQR
- D. CMN

Answer: B. VHJ

Q.4 Pointing to Varun, Dipti said to Karishma, 'His mother is the only daughter of your grandfather's only son'. How is Karishma related to Varun?

- (a) Sister
- (b) Mother
- (c) Mother-in-law
- (d) Daughter

Q. 5 Nishiket went to the post office from his house. He walked for 3km towards west, then turned right and walked for 6 km. Again, he turned right and walked for 11 km. How far is he from the starting point?

- (a) 12 km
- (b) 9.5 km
- (c) 10 km
- (d) 8 km

Q. 6 A, D, F, Q, and T are sitting in a row. A is to the left of Q and to the right of D. F is to the right of Q. T is between Q and F. Who is in the middle of the row?

- (a) Q
- (b) A
- (c) D
- (d) T

Q. 7 R1H, \_\_\_\_, Q9U, O16K, L25J

- (a) R2K
- (b) S4L
- (c) R5L
- (d) None of these

Q.8 N is 40 m South-West of L. If M is 40 m South-East of L, then M is in which direction of N?

- A. East
- B. West
- C. North- East
- D. South- West

Answer: A. East

Q.9 Six friends are sitting in a circle and are facing the centre of the circle. Mary is between Mala and Lino. Priyanshi is between Raj and Madhur. Mala and Raj are opposite to each other. Who is opposite of Mary?

- A. Raj
- B. Madhur
- C. Priyanshi
- D. Mala

Answer C. Priyanshi

Q.10 Anuja's brother-in-law is the son of Yashita. How is Anuja's husband related to Yashita's husband if Anuja had no siblings ?

- A. Son-in-law
- B. Father-in-law
- C. Nephew
- D. Son

Answer: D. Son

### MATHEMATICS

1) Find the median of the following data: 2,7,7,18.

- a) 8
- b) 9
- c) 7
- d) 2

2) Calculate the area of the cone if the radius of the cone is 9cm and the height of the cone is 10cm.

- a) 542
- b) 761
- c) 892
- d) 634

3) Calculate the 1% of 138.

- a) 1.38
- b) 13.8
- c) 0.138
- d) 0.0138

4) A cabinet has 24 socks. What is the probability that randomly selected two pairs of socks will be one green and one blue. Consider the total collection contains a total of 8 red socks, 6 green socks, 4 blue socks and 6 black socks).

- a) 1.2%
- b) 4.3%
- c) 7.1%
- d) 3%

5) The compound interest on Rs. 30,000 at 7% per annum is Rs. 4347. The period (in years) is?

- a) 2 years
- b) 4 years
- c) 5 years
- d) 1 year

6) A and B together have Rs. 1210. If  $\frac{4}{15}$  of A's amount is equal to  $\frac{2}{5}$  of B's amount, how much does B have?

- a) Rs.494
- b) Rs.474
- c) Rs.484
- d) Rs.584

7) By selling a chair for Rs. 2,500 a shopkeeper gains 25%, then what is the purchase price?

- a) Rs. 2600
- b) Rs. 2000
- c) Rs. 2800
- d) Rs. 3000

8) Let A, B and C are three sets such that,  $|A|=150$ ,  $|B|=140$ ,  $|C|=130$ ,  $|A \cap B|=20$ ,  $|C \cap B|=15$  and  $|A \cap C|=10$   $|A \cap B \cap C|=5$ , then what is the cardinality of union of all three sets?

- a) 300
- b) 380
- c) 400
- d) 480

9) What is the derivative of  $x^2 \cos x$  ?

- a)  $2x \sin x - x^2 \cos x$
- b)  $2x \cos x - x^2 \sin x$
- c)  $2^x \cos x - x^2 \cos x$

d)  $\cos x - x^2 \sin x \cos x$

10) The solution set of  $x - 2y = 5$  and  $x + 2y = -7$  is \_\_\_\_\_ .

- a) (0,3)
- b) (-1,-3)
- c) (-3,2)
- d) (2,1)

### CURRENT AFFAIRS

1. The Dadasaheb Phalke Award is given in which field?  
(a) **Literature** (b) Science  
(c) Cinema (d) Sports
2. When is World Heritage Day celebrated?  
(a) **18<sup>Th</sup> April** (b) 28<sup>Th</sup> April  
(c) 29<sup>Th</sup> April (d) 30<sup>Th</sup> April
3. Which Indian city is known as the "Silicon Valley of India"?  
(a) Hyderabad (b) Pune  
(c) **Bengaluru** (d) Chennai
4. Who has won the 2021 Nobel Prize in Physiology or Medicine?  
(a) Karry Mullis (b) Graham Bell  
(c) Newton (d) **David Julius**
5. Who is the founder of Zomato?  
(a) Gautam Adani (b) Mukesh Ambani  
(c) **Deepinder Goyal** (d) Azim Premji
6. Which of these is an Indian multinational company?  
(a) Coca-Cola (b) **Tata**



(6.00

pm).

- The Common Entrance Exam (CEE) will be held online on between 26/5/2025- 31/5/2025 the date will be announced shortly.
- The schedule displayed above is provisional and may change under unavoidable circumstances. The revised schedule, if any, will be notified on website <https://www.jaihindcollege.com/>
- Further details of the Common Entrance Exam will be announced on the website.
- The college reserves the right to alter the above schedule if required, which will be notified on the website.

**Principal**

Jai Hind College (Empowered Autonomous)

6.03.2025